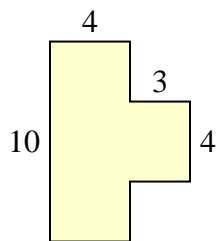


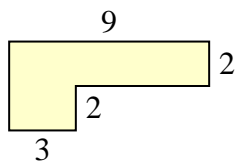
Find the total area of each shape. Measurement is in millimeters (mm). Not to scale.

Answers

1)



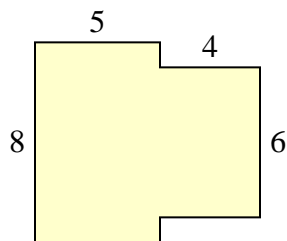
2)



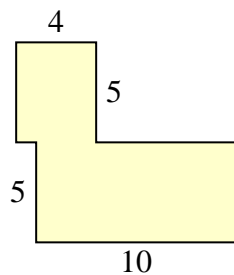
1. _____

2. _____

3)



4)

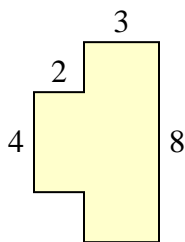


3. _____

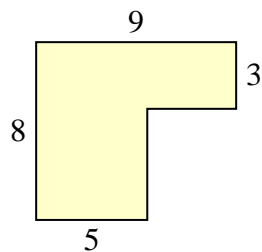
4. _____

5. _____

5)



6)



6. _____

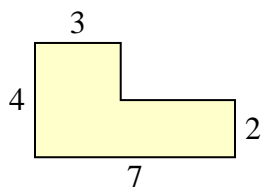
7. _____

8. _____

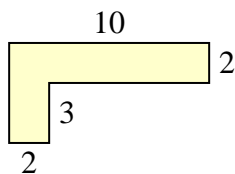
9. _____

10. _____

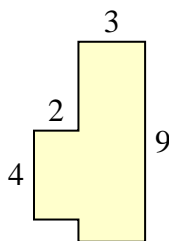
7)



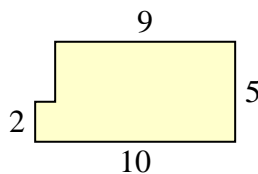
8)



9)

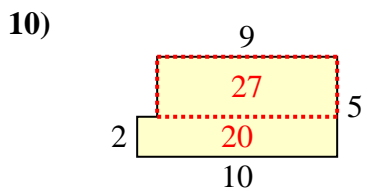
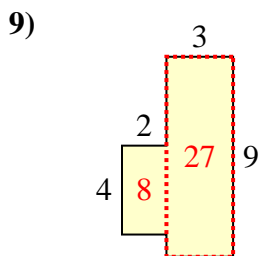
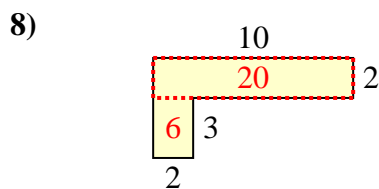
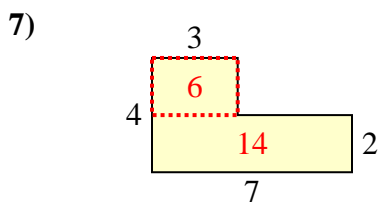
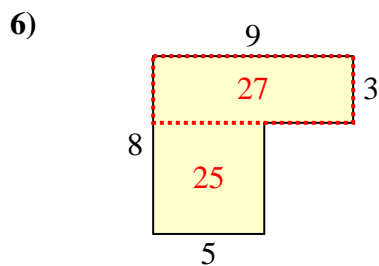
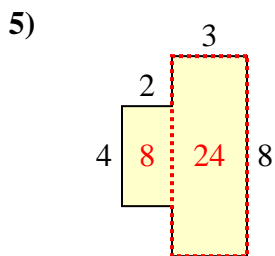
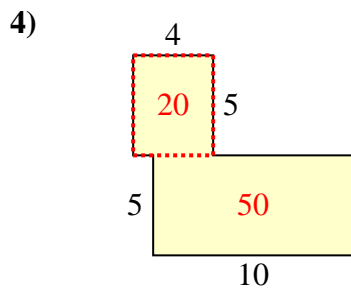
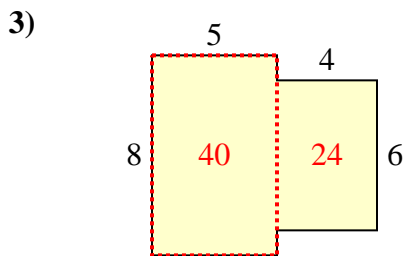
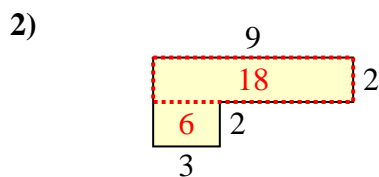
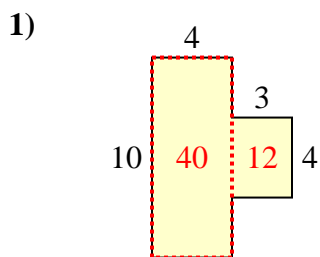


10)





Find the total area of each shape. Measurement is in millimeters (mm). Not to scale.



Answers

1. 52 mm²
2. 24 mm²
3. 64 mm²
4. 70 mm²
5. 32 mm²
6. 52 mm²
7. 20 mm²
8. 26 mm²
9. 35 mm²
10. 47 mm²